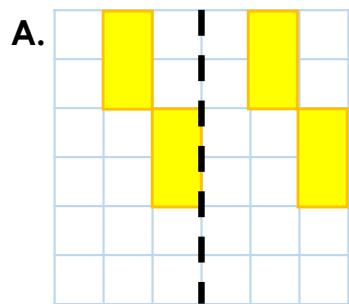
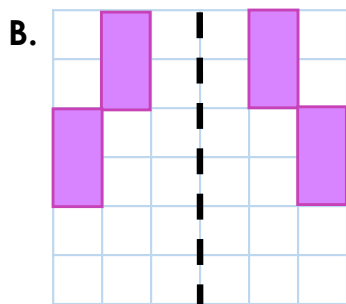
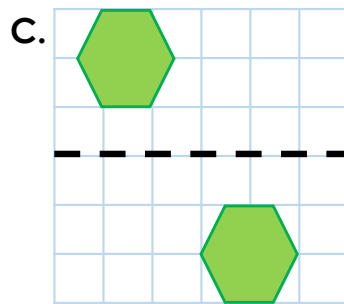


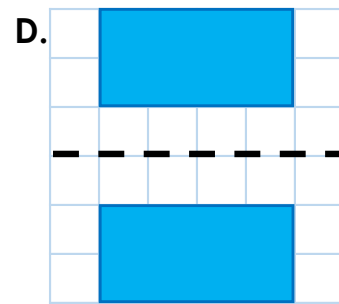
Wednesday – Reflection

1. Put an 'X' in the box of the images showing the correct reflection.

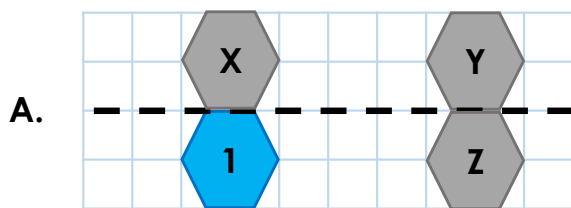


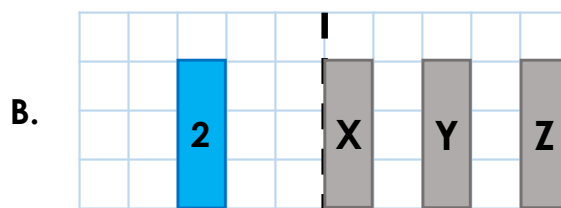






2. Shapes 1 and 2 are reflected in the dotted line. Write the letter of the correct reflected image.

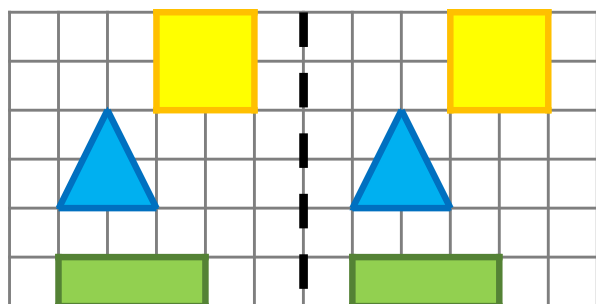




3. Hassan has correctly reflected three shapes. Do you agree? Explain your answer.

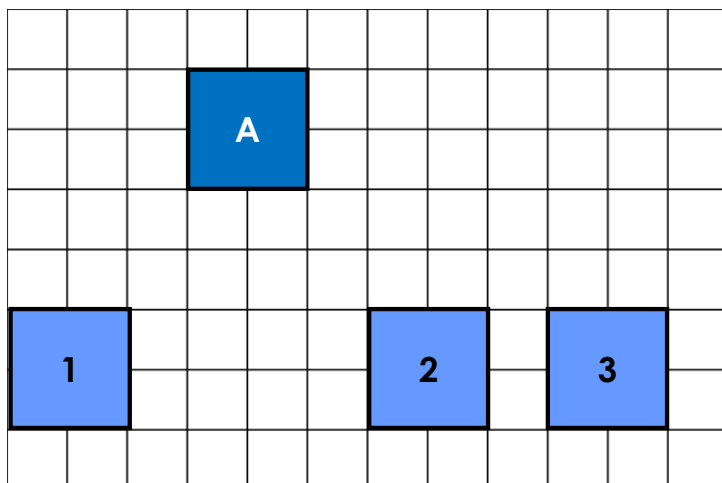


I've reflected by copying the shapes on the other side of the mirror line.



Thursday – Translation

1. Which translation of Shape A has been translated 6 right and 4 down. Put an 'X' by the correct number.

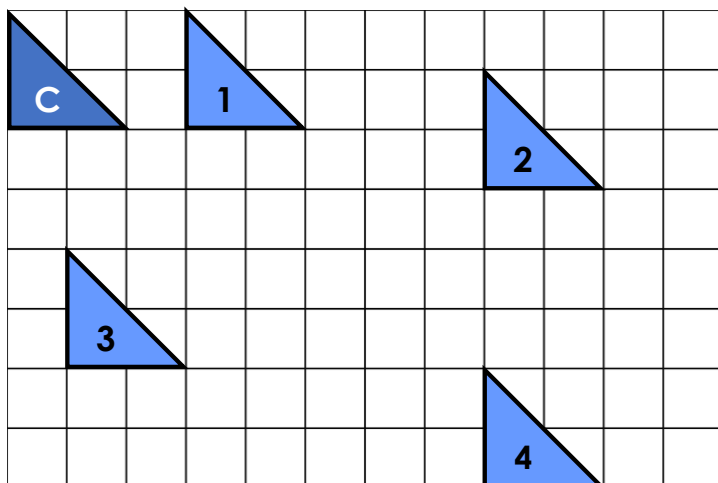


| | |
|---|--|
| 1 | |
|---|--|

| | |
|---|--|
| 2 | |
|---|--|

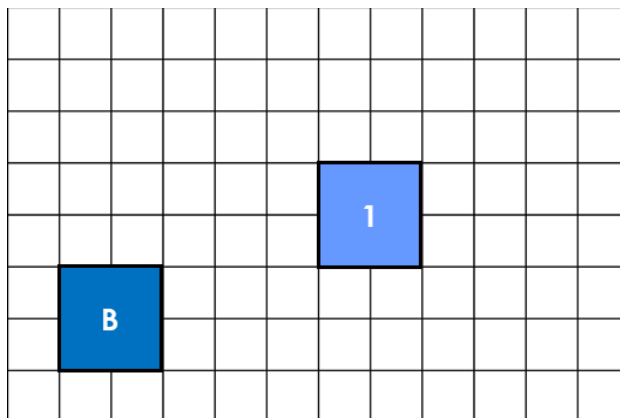
| | |
|---|--|
| 3 | |
|---|--|

2. Shape C has been translated four times. Write the translation for each.



3. Imogen has translated Shape B 5 right and 2 up.

If I switch the numbers around, Shape B will still arrive at the position of Shape 1.



Do you agree? Explain your answer.