

## Monday – Litres


1. Order the volumes of liquid from greatest to smallest.




A.



B.



C.



D.

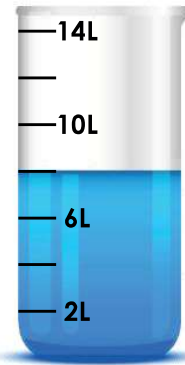


E.


2. Has Alfie measured the liquid correctly?




The volume of this liquid in this container is 6 litres.



3. Which is the odd one out? Explain your answer.




A.



B.



C.



D.