

Year 1 Maths Activity Mat

①


Section 1

What's next?

5	10	15	20			
---	----	----	----	--	--	--

Section 2

Add 1 more flower.



There would be flowers altogether

Section 3

What's the missing number?

$$15 - \square = 5$$



Section 4

Which line is the longest?


A

B

C


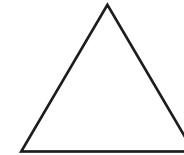
Section 5

If Sarah has 14 apples and she shares them equally with Lisa, how many apples will they have each?



Section 6

Colour half of these shapes.



Section 7

Circle the odd numbers:

12 18 13
17 21 11

Section 8

Fill in the boxes:

$$20 + \square = 25$$

$$17 + \square = 23$$