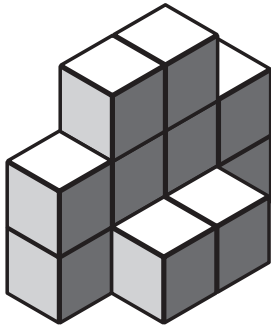


Finding the Volume by Counting Cubes


What is the volume of each shape below?

 = 1 cubic unit

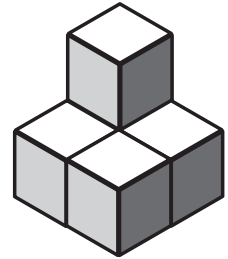
1.



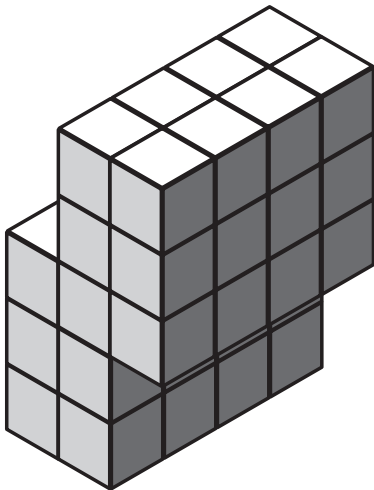
2.



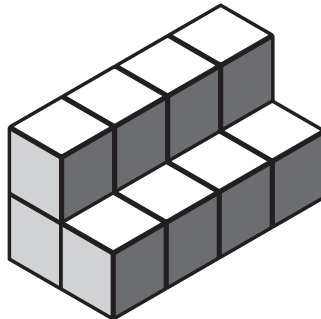
3.



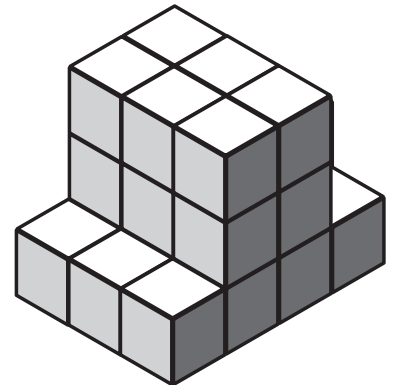
4.



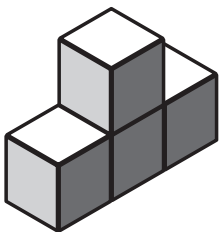
5.



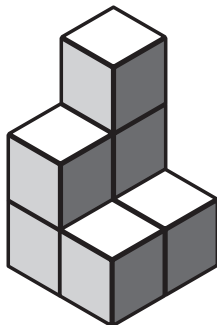
6.



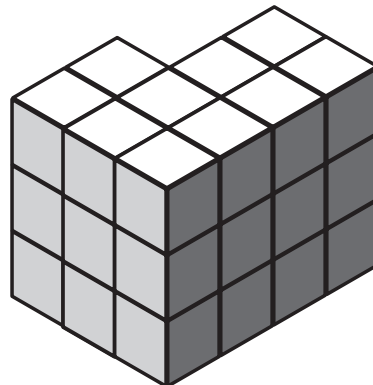
7.



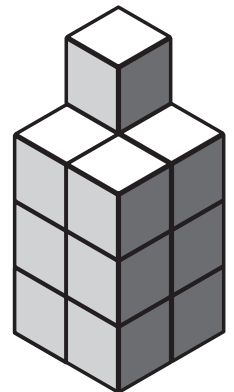
8.



9.



10.



Finding the Volume by Counting Cubes **Answers**

1. 12 cubic units
2. 11 cubic units
3. 5 cubic units
4. 44 cubic units
5. 12 cubic units
6. 24 cubic units
7. 4 cubic units
8. 7 cubic units
9. 30 cubic units
10. 13 cubic units