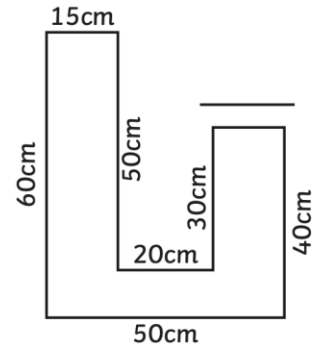
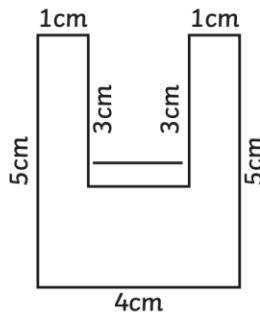
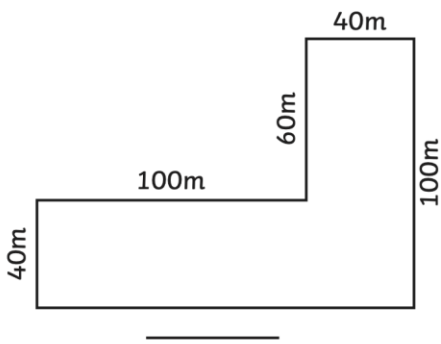


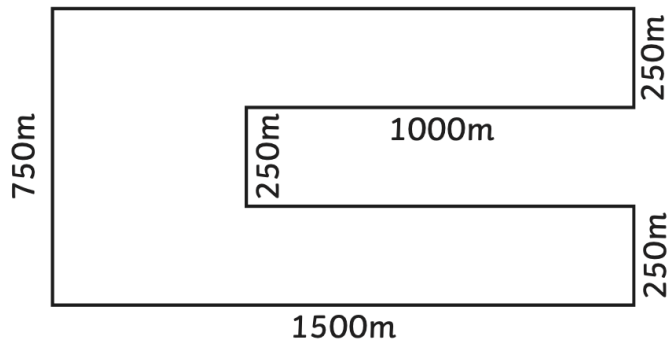


- 1) a) Use the labelled sides to find the length of the unlabelled side on each of these shapes.
b) Calculate the perimeter of each shape.



Perimeter = _____ Perimeter = _____ Perimeter = _____

- 1) Toby says, "This shape has a perimeter of 4000m."



- a) Explain his mistake:
