



Maths 3



First, there were 7 on the bus. Then 2 got off. Now how many are there? _____

$7 - 2 = \underline{\quad}$





First, there were 9 on the bus. Then 3 got off. Now how many are there? _____

$9 - 3 = \underline{\quad}$



First, there were 10 on the bus. Then 6 got off. Now how many are there? _____

$10 - 6 = \underline{\quad}$



First, there were 8 on the bus. Then 5 got off. Now how many are there? _____

$8 - 5 = \underline{\quad}$

